




NAME _____ DATE _____

WORD PROBLEMS

Count the tens and ones and complete the statement.

1)



Tens	Ones

There are ____ candles.


2)



Tens	Ones

There are ____ fish.


3)



Tens	Ones

There are ____ oranges.

4)



Tens	Ones

There are ____ sticks.